

Name _____

Period _____

Date _____

Midterm Part II: Multiple Choice
(2 points each)

Part I: (20 pts.)

Free Response

Part II: (80 pts.)

Multiple Choice

SCORE

Parent(s) Signature _____

Directions: Write the correct number in the space provided. *Please write very neatly.*

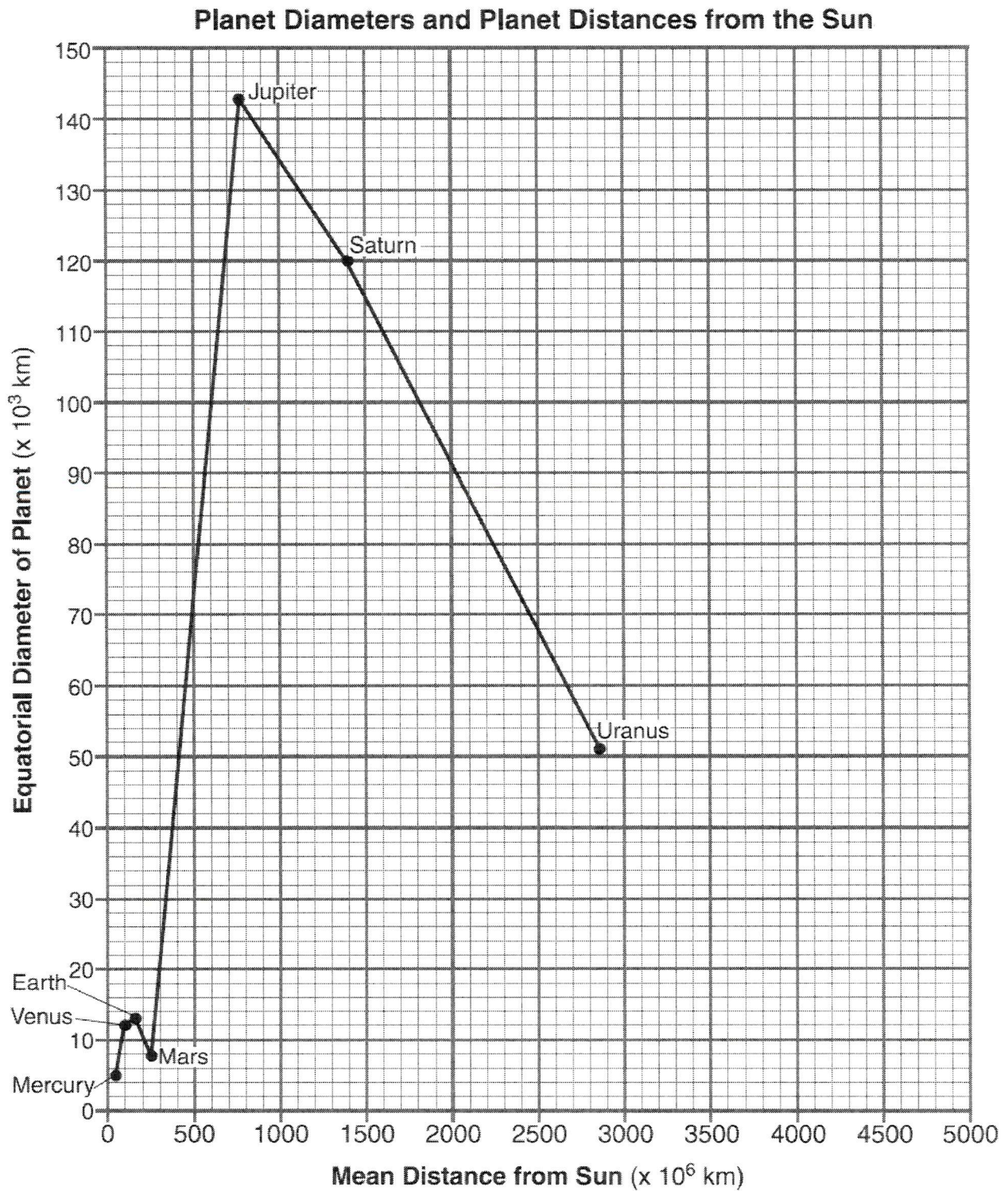
- | | |
|-----------|-----------|
| 1) _____ | 19) _____ |
| 2) _____ | 20) _____ |
| 3) _____ | 21) _____ |
| 4) _____ | 22) _____ |
| 5) _____ | 23) _____ |
| 6) _____ | 24) _____ |
| 7) _____ | 25) _____ |
| 8) _____ | 26) _____ |
| 9) _____ | 27) _____ |
| 10) _____ | 28) _____ |
| 11) _____ | 29) _____ |
| 12) _____ | 30) _____ |
| 13) _____ | 31) _____ |
| 14) _____ | 32) _____ |
| 15) _____ | 33) _____ |
| 16) _____ | 34) _____ |
| 17) _____ | 35) _____ |
| 18) _____ | |

Name _____

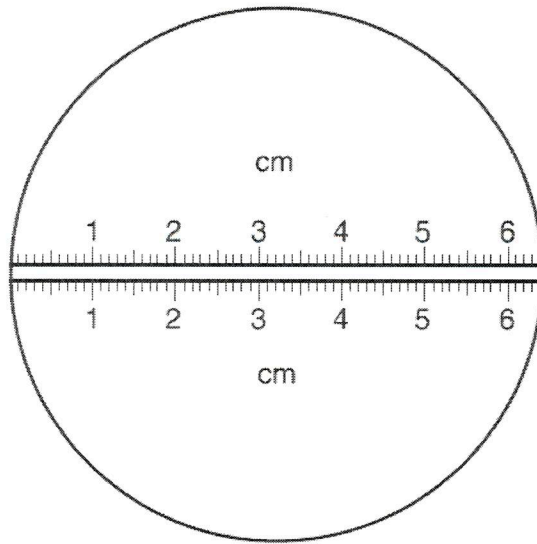
Period _____

Score _____

1)



2)



Scale: 1 cm = 2000 km

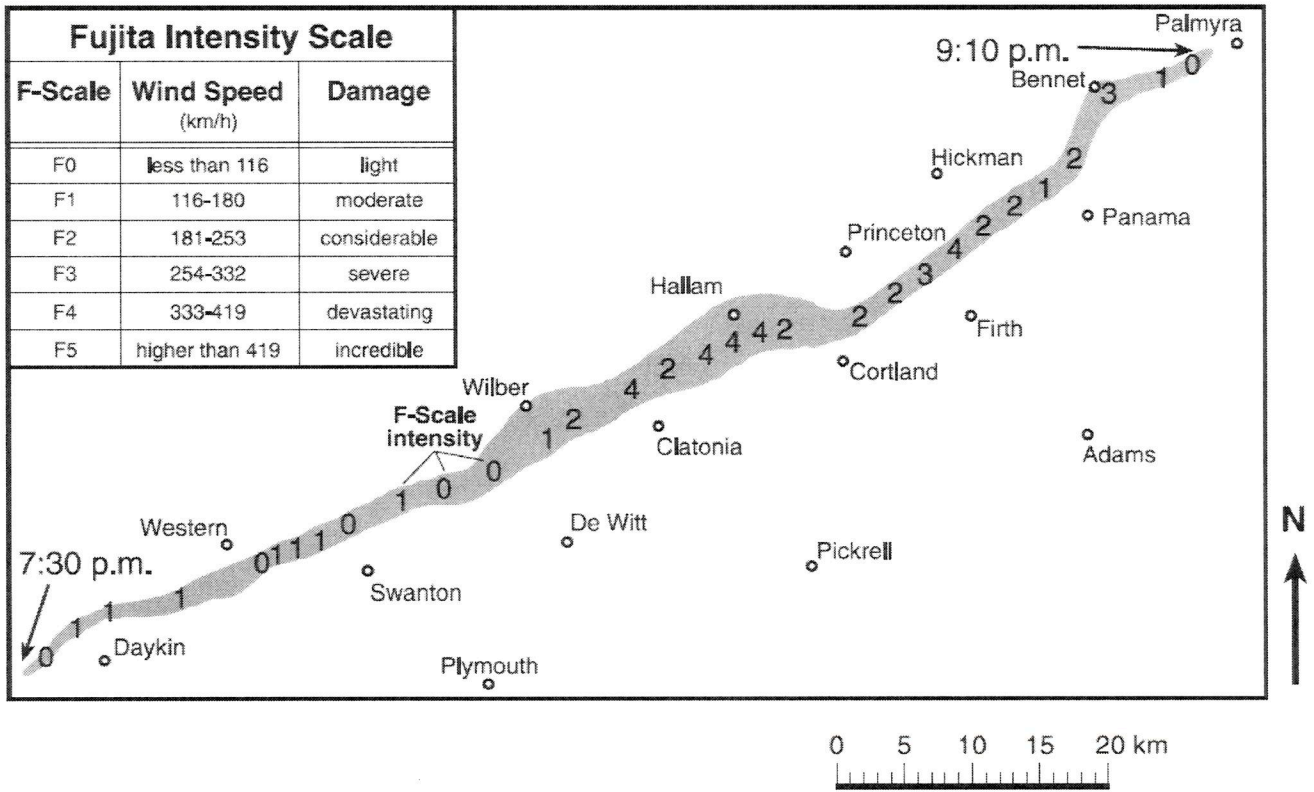
3) Jovian periods of revolution: _____

Jovian periods of rotation: _____

4) _____

5)

Path of Nebraska Tornado



6) _____ km/h


7) _____

8) _____

9) _____ °

10) _____ ft

11)



12) _____

13) _____

14) _____

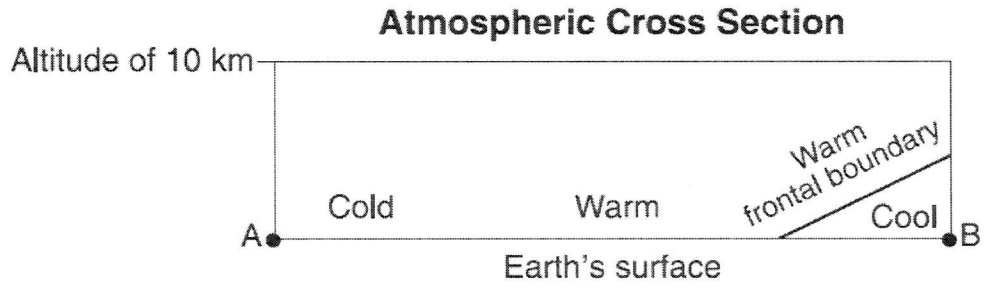
15) Air temperature at X: _____

Water vapor content at X: _____

16) Circle one: land ocean

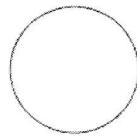
Relative temperature of Earth's surface: _____

17)

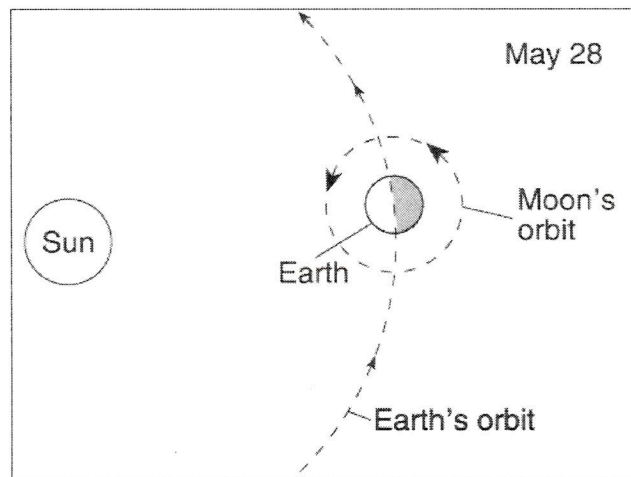


18) _____ h _____ min

19)



20)



(Not drawn to scale)

